

Math 6 UNIT 4 PRACTICE TEST

Complete along with p 154-155 # 1, 3, 4, 5, 6, 7, 9, 10

1) Draw and label an angle with each measure:

a)  $110^\circ$

b)  $220^\circ$

c)  $320^\circ$

d)  $50^\circ$

2) Draw a quadrilateral with 3 acute angles.

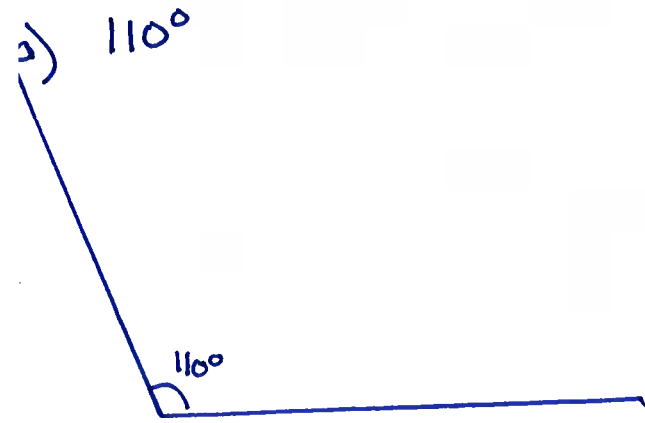
# Math 6 UNIT 4 PRACTICE TEST

Complete along with p 154-155 # 1, 3, 4, 5, 6, 7, 9, 10


SAMPLE ANSWERS

1) Draw and label an angle with each measure:

$$360 - 220 = 140^\circ$$

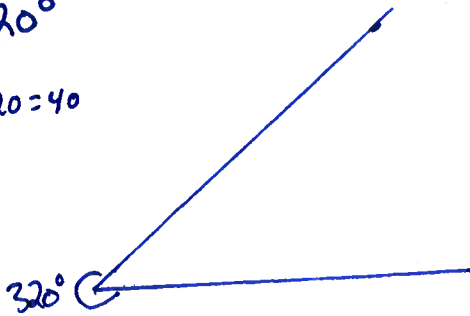


b)  $220^\circ$

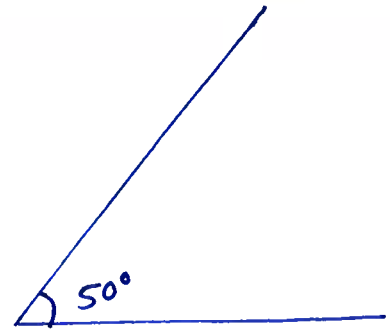


c)  $320^\circ$

$$360 - 320 = 40$$

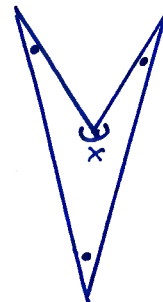
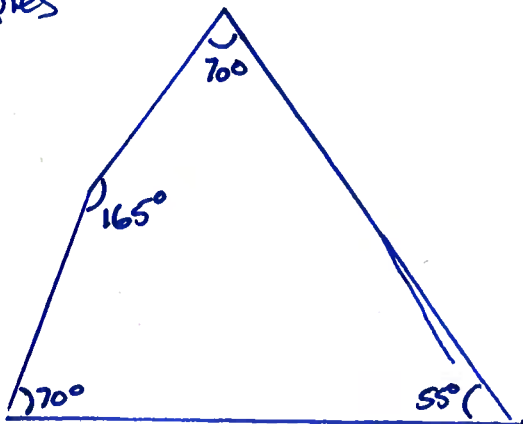


d)  $50^\circ$



2) Draw a quadrilateral with 3 acute angles.

examples



• = acute  
x = reflex